

# Guided Practice


## 4.2

NAME \_\_\_\_\_

Module 4 Fractions, Decimals, Percents, and Factors  
Lesson 2 Concepts of Decimal Place Value and Fraction and Percent Equivalents


### Set 1

1 Name the decimal shown by the shaded region.



0.9


2 Name the decimal shown by the shaded region.



0.61


### Set 2

1 Find the decimal equivalent of  $\frac{13}{100}$ .



0.13

- 2 Find the decimal equivalent of  $\frac{1}{4}$ .




0.25

Set 3

- 1 Find the percent equivalent of  $\frac{21}{100}$ .

21%

- 2 Find the percent equivalent of  $\frac{2}{5}$ .



40%

Set 4

- 1 Complete the table.

Fraction	Decimal	Percent
$\frac{1}{2}$	0.5	50%
$\frac{1}{10}$	0.1	10%
$\frac{6}{100}$	0.06	6%