

# Guided Practice

## 3.3

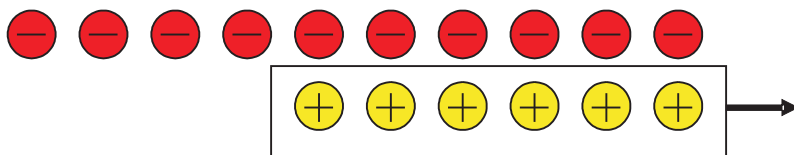
NAME \_\_\_\_\_

Module 3 Integers  
Lesson 3 Subtracting Integers

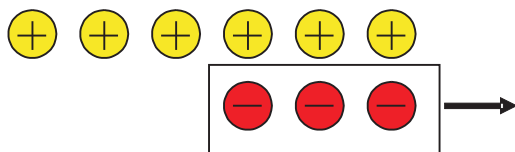
### Set 1

Use counters to subtract.

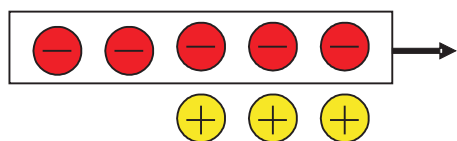
1  $-4 - 6 = -10$



2  $3 - (-3) = 6$



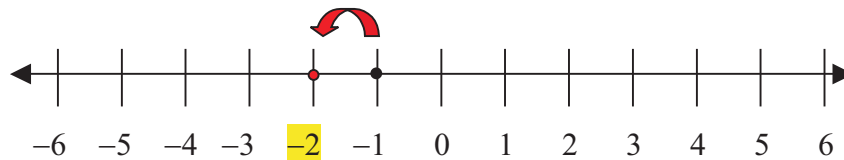
3  $-2 - (-5) = 3$



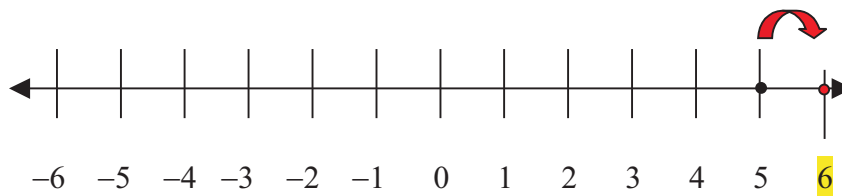
### Set 2

Use a number line to subtract.

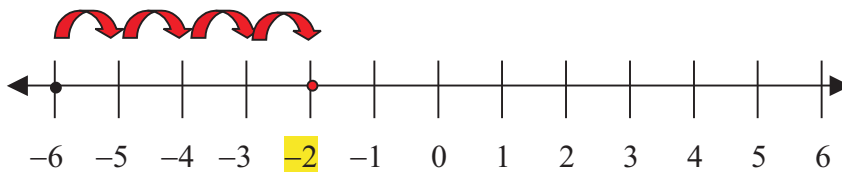
1  $-1 - 1 = -2$



2  $5 - (-1)$     6



3  $-6 - (-4)$     -2



Set 3

Subtract.

1  $25 - (-20)$   
45

2  $-30 - (-15)$   
-15

3  $20 - 22$   
-2