

# Guided Practice 3.2

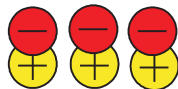
NAME \_\_\_\_\_

Module 3 Integers  
Lesson 2 Adding Integers


## Set 1

Add using counters.

1  $3 + (-3)$   
0



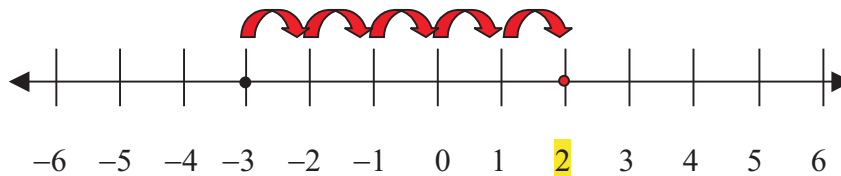
2  $-2 + (-5)$   
-7



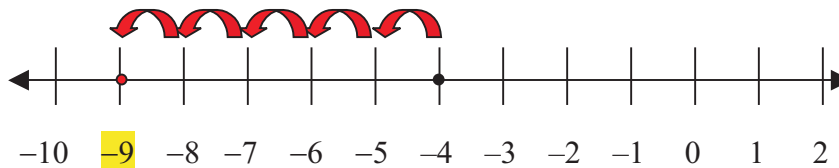
## Set 2

Add using a number line.

1  $-3 + 5$   
2



2  $-4 + (-5)$   
-9



**Set 3**

**Add.**

**1**  $-21 + 42$

$$|-21| = 21 < |42| = 42$$

$$42 - 21 = 21$$

$$-21 + 42 = 21$$

**2**  $-30 + (-15)$

$$|-30| = 30 \quad |15| = 15$$

$$30 + 15 = 45$$

$$-30 + (-15) = -45$$

**3**  $20 + 32$

$$|20| = 20 \quad |32| = 32$$

$$20 + 32 = 52$$