

Additional Practice

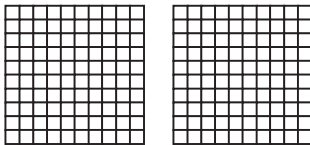
5.4

NAME _____

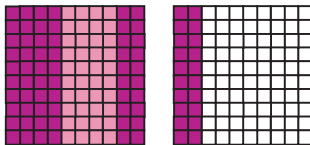
Module 5 Decimal Operations, Exponents, and Powers
Lesson 4 Multiplying Decimals

Use a model to solve.


1. 3×0.4




1.2



2. 0.9×0.5



0.45



Multiply.

3. $0.03 \times 1,000$

30

4. 13.8×10

138

5. 11.54×100

1,154

6. 53.091×100

5,309.1

Estimate before multiplying.

7. 9.09×1.5

Estimate: 13
Product: 13.635

8. 31.7×20.06

Estimate: 640
Product: 635.902

Multiply.

9. 5.8×1.9

11.02

10. 12.12×1.44

17.4528

11. $5,001 \times 0.66$

3,300.66

12. 70.1×0.225

15.7725

