

# Additional Practice

## 3.3

NAME \_\_\_\_\_

### Module 3 Integers

#### Lesson 3 Subtracting Integers

Use counters to subtract.

1.  $2 - (-5)$   
**7**

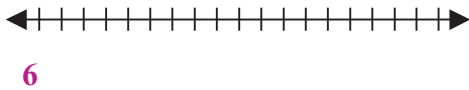
2.  $-13 - 16$   
**-29**

3.  $-14 - (-10)$   
**-4**

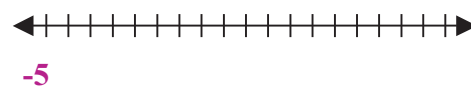
4.  $8 - 9$   
**-1**

Use a number line to subtract.

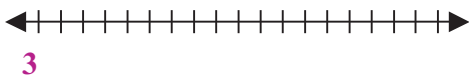
5.  $0 - (-6)$



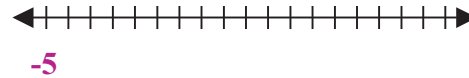
6.  $-7 - (-2)$



7.  $8 - 5$



8.  $-2 - 3$



Subtract.

9.  $-3 - (-9)$   
**6**

10.  $15 - (-2)$   
**17**

11.  $22 - 19$   
**3**

12.  $-5 - 8$   
**-13**

13.  $-81 - (-31)$   
**-50**

14.  $44 - 52$   
**-8**

15.  $-4 - (-24)$   
**20**

16.  $-8 - (-7)$   
**-1**

17.  $-89 - (-1)$   
**-88**

18.  $-12 - 7 - (-7) - (-12)$   
**0**

19.  $14 - (-14) - 4$   
**24**

20.  $-10 - 4 - (-14) - 1$   
**-1**

