

Additional Practice

3.2

NAME _____

Module 3 **Integers**
Lesson 2 **Adding Integers**

Add using counters.


1. $-3 + (-3)$
-6


2. $-11 + 15$
4


3. $-1 + 8$
7

4. $15 + 12$
27

Add using a number line.

5. $6 + 3$

9

6. $-7 + 7$

0

7. $8 + (-8)$

0

8. $-2 + (-5)$

-7

Add.

9. $31 + (-11)$
20

10. $-12 + (-12)$
-24

11. $6 + (-6)$
0

12. $-85 + 15$
-70

13. $8 + (-22)$
-14

14. $25 + (-18)$
7

15. $-35 + (-1)$
-36

16. $-202 + 4$
-198

17. $-16 + (-9)$
-25

18. $20 + (-10) + 10 + (-20)$
0

19. $-1 + (-6) + (-2) + (-3)$
-12

20. $4 + (-4) + 5 + 11$
16

