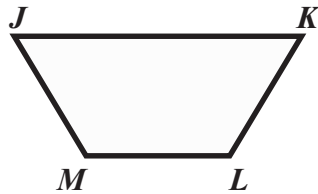


NAME _____

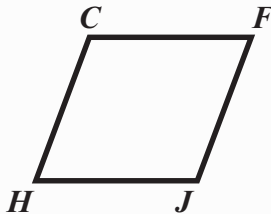
Module 9 Characteristics of Geometric Shapes
Lesson 2 Quadrilaterals

Set 1

- 1 Classify the figure in as many ways as possible. Then, name the figure two different ways.



- 2 Classify the figure in as many ways as possible.



- 3 Tell whether each statement is true or false. Explain your answer.

- Every parallelogram is a square.

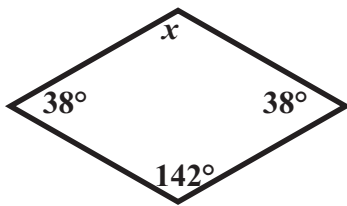
- No rectangle is a trapezoid.

- Some parallelograms are rectangles.

Set 2

Find the value of x .

1



2

Three angles of a quadrilateral are congruent, each with a measure of 95° . Find the measure of the fourth angle.