

# Guided Practice 8.2


NAME \_\_\_\_\_

Module 8 Points, Lines, Angles, and Triangles  
Lesson 2 Angle Classifications and Line Relationships

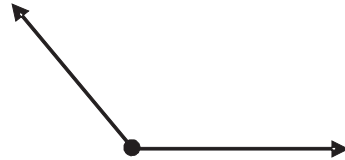
### Set 1

Classify the angle and estimate the angle's measure.

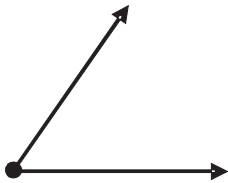
1



2



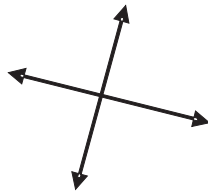
3



### Set 2

Describe these lines.

1



2



3

