

Guided Practice

5.4


NAME _____

Module 5 Decimal Operations, Exponents, and Powers
Lesson 4 Multiplying Decimals


Set 1

Use a model to solve.

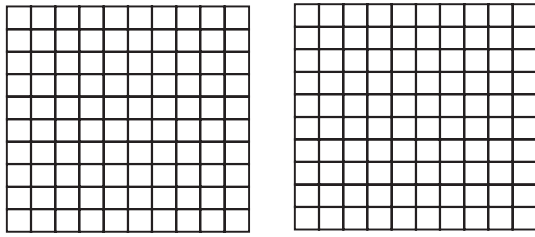
1 0.2×0.7



2 0.6×0.5



3 3×0.5



Set 2

Multiply.

1 0.8×10

2 2.5×100

3 $0.458 \times 1,000$

Set 3

Estimate before multiplying.

1 0.8×24

2 1.005×12.5

Set 4

Multiply.

1 3.75×5.5

2 0.006×0.015