

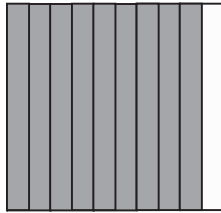
# Guided Practice 4.2

NAME \_\_\_\_\_


Module 4 Fractions, Decimals, Percents, and Factors  
Lesson 2 Concepts of Decimal Place Value and Fraction and Percent Equivalents

## Set 1

1 Name the decimal shown by the shaded region.




2 Name the decimal shown by the shaded region.




## Set 2

1 Find the decimal equivalent of  $\frac{13}{100}$ .




- 2 Find the decimal equivalent of  $\frac{1}{4}$ .



Set 3

- 1 Find the percent equivalent of  $\frac{21}{100}$ .

- 2 Find the percent equivalent of  $\frac{2}{5}$ .



Set 4

- 1 Complete the table.

Fraction	Decimal	Percent
$\frac{1}{2}$		
	0.1	
		6%