

# Guided Practice

## 3.3

NAME \_\_\_\_\_

Module 3 Integers  
Lesson 3 Subtracting Integers

### Set 1

Use counters to subtract.

1  $-4 - 6$

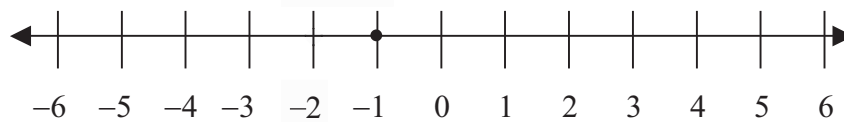
2  $3 - (-3)$

3  $-2 - (-5)$

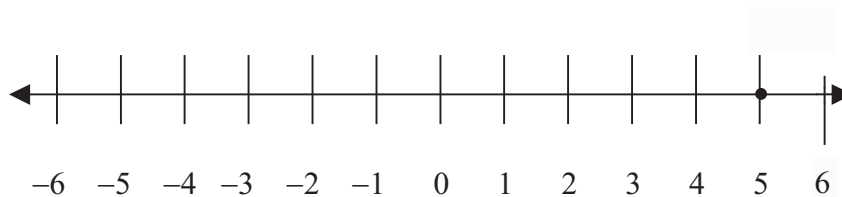
### Set 2

Use a number line to subtract.

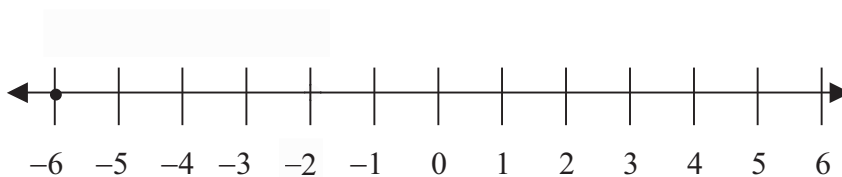
1  $-1 - 1$



2  $5 - (-1)$



3  $-6 - (-4)$



**Set 3**

**Subtract.**

1  $25 - (-20)$

2  $-30 - (-15)$

3  $20 - 22$