

# Guided Practice

## 3.1

NAME \_\_\_\_\_

Module 3    Integers  
Lesson 1    Integers and Absolute Value

### Set 1

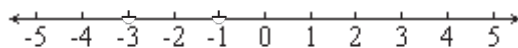
- 1 Use a negative or positive number to represent six floors up.
- 2 Use a negative or positive number to represent owing \$10 for a DVD rental.

### Set 2

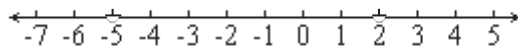
- 1 Write the opposite of -31.
- 2 Write the opposite of 24.
- 3 What is  $|-8|$ ?
- 4 What is  $|21|$ ?

### Set 3

- 1 Compare -3 and -1. Write  $>$  or  $<$ .



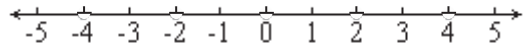
- 2 Compare 2 and -5. Write  $>$  or  $<$ .



Set 4

1

Order -2, 0, 2, -4, and 4 from least to greatest.



2

Order -4, 1, 0, -1, and 3 from least to greatest.

