

Guided Practice

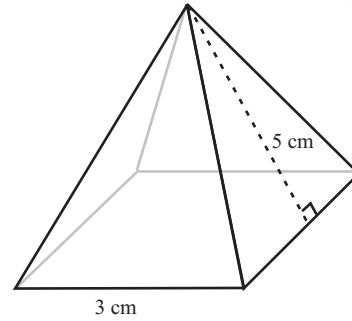
13.6

NAME _____

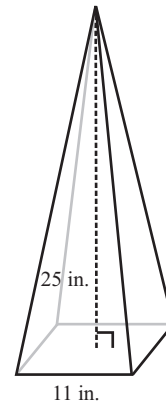
Module 13 Perimeter, Area, and Volume
 Lesson 6 Surface Area: Pyramids and Cones

Set 1

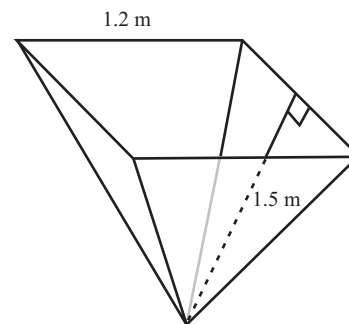
1 Find the surface area of the square pyramid.



2 Find the surface area of the square pyramid.



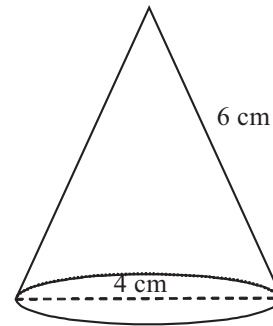
3 Find the lateral area of the square pyramid.



Set 2

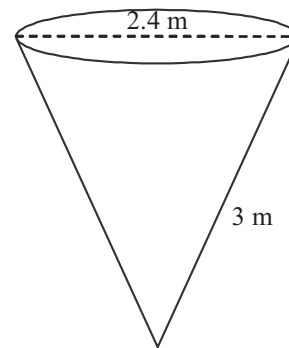
1

Find the surface area of the cone.



2

Find the lateral area of the cone to the nearest square meter.



3

Find the surface area of the figure.

