

Guided Practice

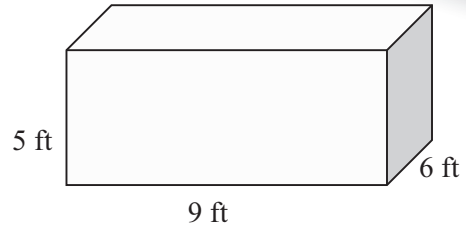
13.4

NAME _____

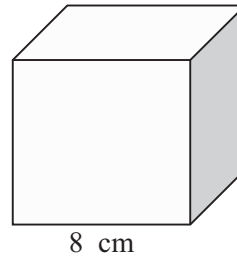
Module 13 Perimeter, Area, and Volume
Lesson 4 Surface Area: Prisms, Cylinders, and Spheres

Set 1

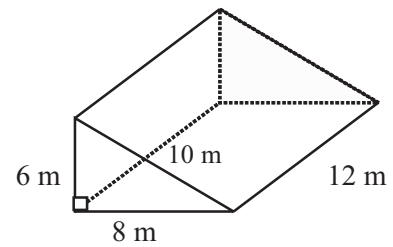
1 Find the surface area of the rectangular prism.



2 Find the surface area of the cube.

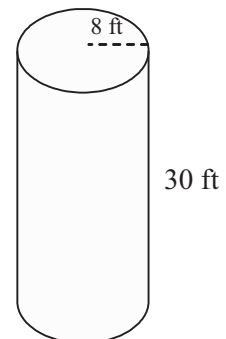


3 Find the surface area of the triangular prism.



Set 2

1 Find the surface area of the cylinder.



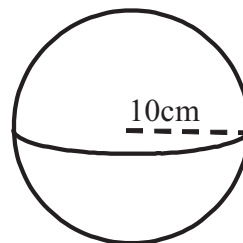
2

Find the surface area of a cylinder with a diameter of 12 millimeters and height of four millimeters.

Set 3

1

Find the surface area of the sphere.



2

Find the surface area of a sphere with a diameter of eight millimeters.