

Guided Practice 10.5

NAME _____

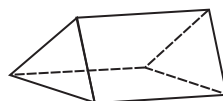
Module 10 Coordinate Geometry and Spatial Visualization

Lesson 5 Building Models

Set 1

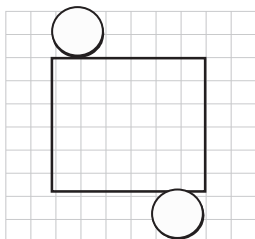
1

Draw a net for this figure.

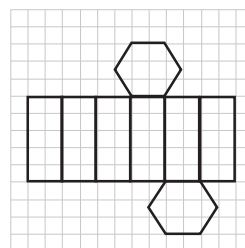


What solid figure does the net represent?

2



3



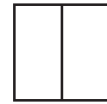
Set 2

- 1 Give the top, front, and right views of the hemisphere.

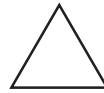


A large, empty rectangular box intended for the student to draw the top, front, and right views of the hemisphere.

- 2 What solid figure has the top, front, and side views shown?



Top view



Front view



Right view

- 3 Draw front, top, and left-side views of the figure.

