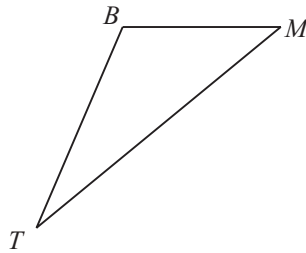


Additional Practice 8.5

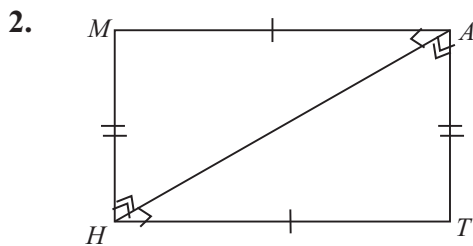
NAME _____

Module 8 Points, Lines, Angles, and Triangles
 Lesson 5 Congruent Triangles

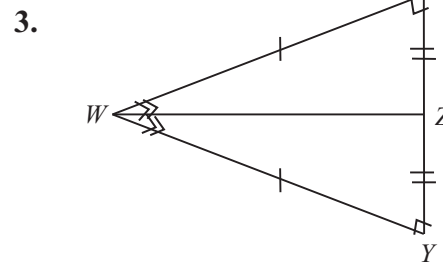
1. $\triangle BMT$ is shown below. Draw $\triangle KAP$ so that $\triangle KAP \cong \triangle BMT$. Label the corresponding parts congruent.



Complete the congruence statement.

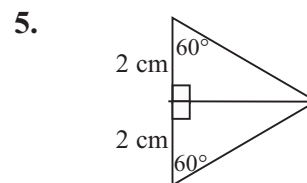
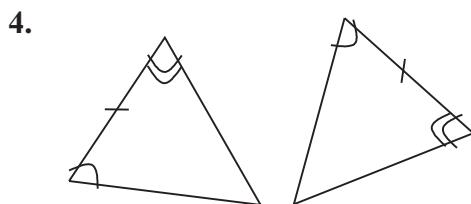


$\triangle MHA \cong \triangle$ _____

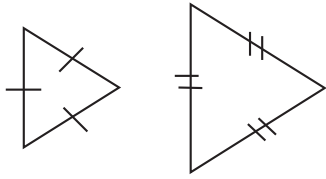


$\triangle YWZ \cong \triangle$ _____

Determine whether the triangles are congruent. Write *yes* or *no*. If yes, state the rule of congruence.



6.



7.

