

Additional Practice

3.3

NAME _____

Module 3 **Integers**
Lesson 3 **Subtracting Integers**

Use counters to subtract.

1. $2 - (-5)$

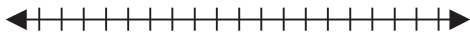
2. $-13 - 16$

3. $-14 - (-10)$

4. $8 - 9$

Use a number line to subtract.

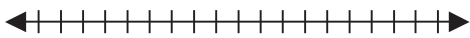
5. $0 - (-6)$



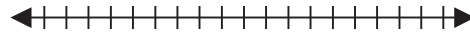
6. $-7 - (-2)$



7. $8 - 5$



8. $-2 - 3$



Subtract.

9. $-3 - (-9)$

10. $15 - (-2)$

11. $22 - 19$

12. $-5 - 8$

13. $-81 - (-31)$

14. $44 - 52$

15. $-4 - (-24)$

16. $-8 - (-7)$

17. $-89 - (-1)$

18. $-12 - 7 - (-7) - (-12)$

19. $14 - (-14) - 4$

20. $-10 - 4 - (-14) - 1$